



What time is it ?




It is _____ o'clock.

It's _____ o'clock.




It is half past _____ .

It's half past _____ .



It is quarter to _____ .

It's quarter to _____ .



It is quarter past _____ .

It's quarter past _____ .